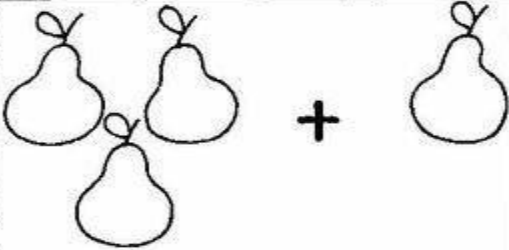

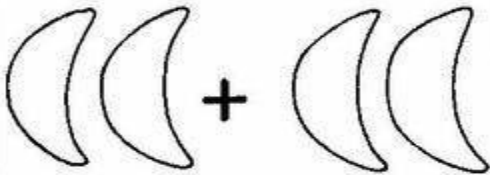
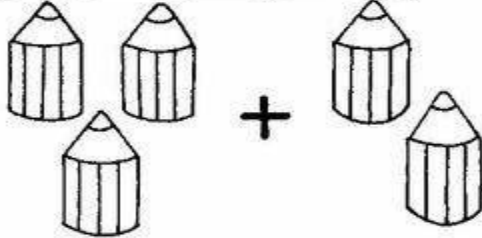
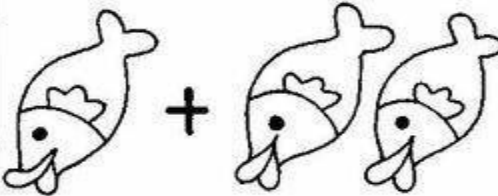



Optellen

Maak de sommen, de figuren boven de som helpen je.

 $3 + 1 = \cdot$	 $4 + 2 = \cdot$
 $2 + 2 = \cdot$	 $3 + 2 = \cdot$
 $1 + 2 = \cdot$	 $3 + 3 = \cdot$

Doel: optellen met behulp van voorwerpen.

<https://gr.pinterest.com/pin/611434086888973304/>










ΠΟΣΟ ΚΑΝΟΥΝ ΟΛΑ ΜΑΖΙ ; ΓΡΑΦΩ ΤΟΝ ΑΡΙΘΜΟ.

ΠΟΣΟ ΚΑΝΟΥΝ ΟΛΑ ΜΑΖΙ; ΓΡΑΦΩ ΤΟΝ ΑΡΙΘΜΟ.

Name _____

Ladybug Addition

Add the ladybugs.

 $3 + 3 = \underline{\quad}$	 $2 + 4 = \underline{\quad}$	 $2 + 3 = \underline{\quad}$
 $5 + 1 = \underline{\quad}$	 $2 + 6 = \underline{\quad}$	 $2 + 2 = \underline{\quad}$
 $3 + 5 = \underline{\quad}$	 $7 + 2 = \underline{\quad}$	 $1 + 2 = \underline{\quad}$









© Kool Kinder

Πόσο κάνουν όλα μαζί; Γράφω τον αριθμό στο κουτάκι.

Name: _____

Picture Addition

Count, add and write the correct number in the box

		<input type="text"/>		
4	+	2	=	<input type="text"/>
		<input type="text"/>		
3	+	3	=	<input type="text"/>
		<input type="text"/>		
2	+	1	=	<input type="text"/>
		<input type="text"/>		
4	+	3	=	<input type="text"/>