

1) Να ενώσεις τους ίδιους αριθμούς:

1 \*

\* 4

2 \*

\* 3

3 \*

\* 1


4 \*

\* 5

5 \*

\* 2

2) Μετράω τα αντικείμενα και κυκλώνω το σωστό αριθμό:



4



3

1

2

3

5



3

2

4

5

2




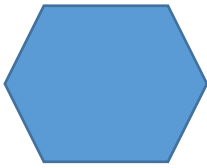
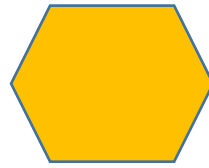
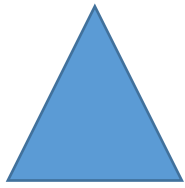
1

1

3

4

3) Να ενώσεις τα όμοια σχήματα:



Βοήθησε τα μικρά να πάνε στην μαμά τους. Δείξε τους τον δρόμο...

